

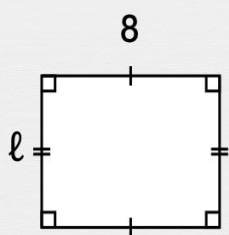


Périmètre des figures

Retrouve la longueur manquante de la figure.

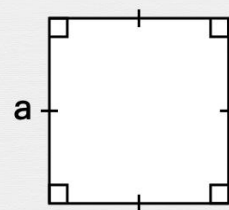
$P = 28 \text{ cm}$

$\ell =$ cm



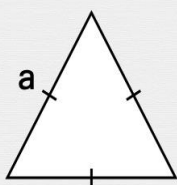
$P = 24 \text{ cm}$

$a =$ cm



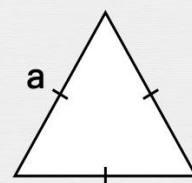
$P = 9 \text{ cm}$

$a =$ cm



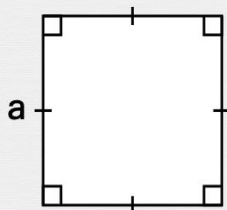
$P = 15 \text{ cm}$

$a =$ cm



$P = 16 \text{ cm}$

$a =$ cm



$P = 8 \text{ cm}$

$a =$ cm

