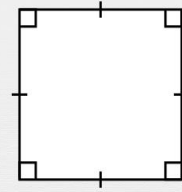
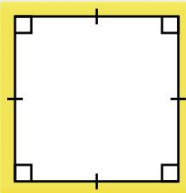
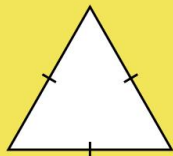
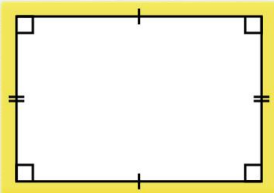




Périmètre des polygones

Associe les formules de périmètre aux figures correspondantes.

$$P = 3 \times a$$

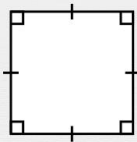


$$P = 3 \times a$$

$$P = 4 \times a$$

$$P = (L + \ell) \times 2$$

a

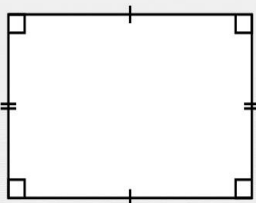
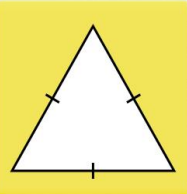
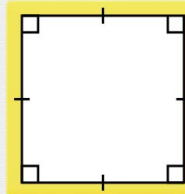
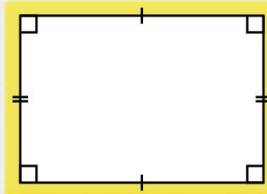


$$P = 3 \times a$$

$$P = 4 \times a$$

$$P = (L + \ell) \times 2$$

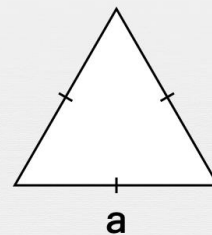
$$P = (L + \ell) \times 2$$



$$P = (L + \ell) \times 2$$

$$P = 4 \times a$$

$$P = 3 \times a$$



a

$$P = 4 \times a$$

$$P = (L + \ell) \times 2$$

$$P = 3 \times a$$