




# Multiplier un nombre par une fraction

Complète l'opération à l'aide de l'image.

$$\frac{1}{2} \text{ de } 4 = \square \div \square = \square$$




$$\frac{1}{2} \text{ de } 2 = \square \div \square = \square$$




$$\frac{1}{3} \text{ de } 3 = \square \div \square = \square$$



$$\frac{1}{4} \text{ de } 12 = \square \div \square = \square$$



$$\frac{1}{2} \text{ de } 8 = \square \div \square = \square$$



$$\frac{1}{3} \text{ de } 9 = \square \div \square = \square$$

