

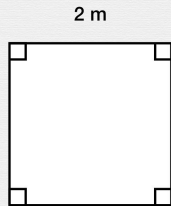


Perimeters of Polygons

Solve the word problems

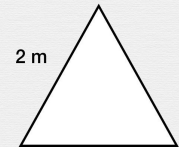
Jane has a square rug. Each side is 2 m.
What is the perimeter of the rug?

Write your answer here **m**



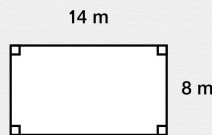
Juliet's has a triangular table. Each side is 2 m. What is the perimeter of the surface of the table?

Write your answer here **m**



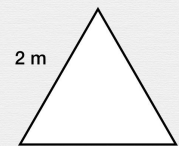
Mrs. Gregory's classroom is 14 m long and 8 m wide.
What is the perimeter of her classroom?

Write your answer here **m**



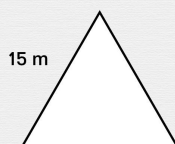
Juliet's has a triangular table. Each side is 2 m. What is the perimeter of the surface of the table?

Write your answer here **m**



Maggie has a triangular garden. Each side of the garden is 15 m. What is the perimeter of the garden?

Write your answer here **m**



A soccer field is 120 m by 90 m.
What is the perimeter of the field?

Write your answer here **m**

