



Axes gradués : les fractions

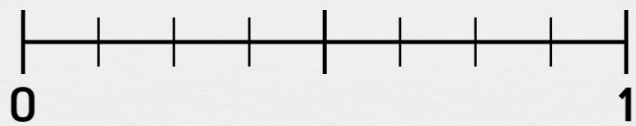
Place correctement le point sur l'axe gradué.




Le point G d'abscisse $\frac{2}{3}$




Le point L d'abscisse $\frac{1}{2}$




Le point O d'abscisse $\frac{3}{4}$



Le point B d'abscisse $\frac{7}{8}$



Le point S d'abscisse $\frac{2}{8}$



Le point F d'abscisse $\frac{1}{8}$