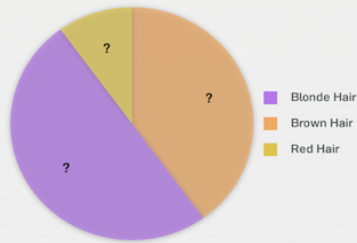




Making Tables and Graphs

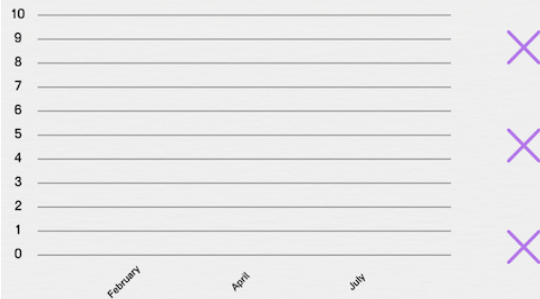
After reading the paragraph, complete the graph, chart or table

In kindergarten, 40% of the students have brown hair, 50% have blonde hair, and 10% have red hair. Draw the pie chart.

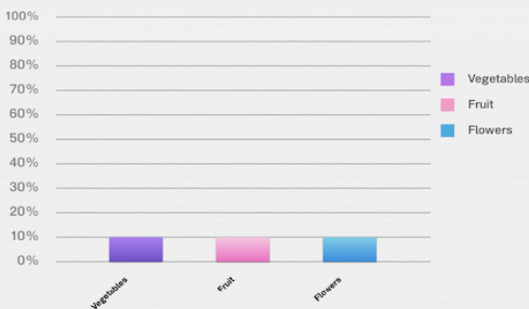


10% 40% 50%

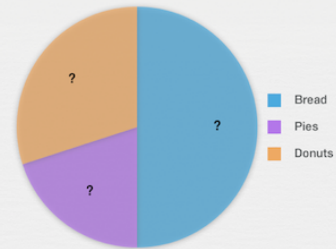
In February, Joe went to the movies twice. In April, he went once, and in July he went 4 times. Draw the line graph.



In Paul's garden, he has 40% vegetables, 20% fruit, and 40% flowers. Draw the bar chart.

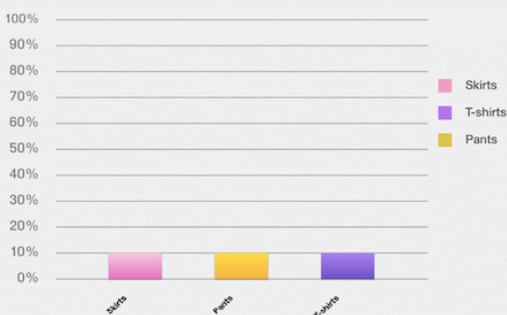


At the end of the day, the supermarket bakery still has left: 50% of the bread, 20% of the pies and 30% of the donuts. Draw the pie chart.



30% 20% 50%

In Aurora's dresser, she has 30% skirts, 40% pants, and 30% t-shirts. Draw the bar chart.



In the store's aquarium, 20% of fish are goldfish, 40% are neon tetras, and 30% are cleaner fish. Draw the bar chart.

