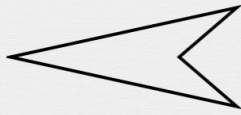




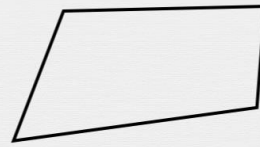
Quadrilatères : premières bases

La figure présentée est-elle concave ou convexe ?



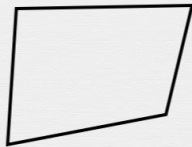
concave

convexe



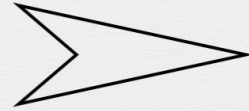
concave

convexe



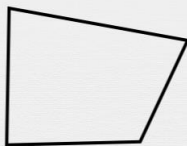
concave

convexe



concave

convexe



concave

convexe



concave

convexe