

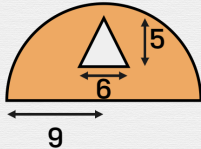


Find the Area

Calculate the area of the colored part.

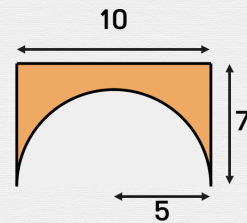
The area of the orange part is:

Write your answer here cm^2



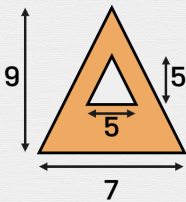
The area of the orange part is:

Write your answer here cm^2



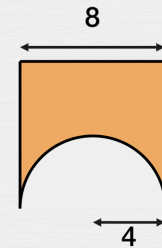
The area of the orange part is:

Write your answer here cm^2



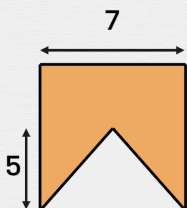
The area of the orange part is:

Write your answer here cm^2



The area of the orange part is:

Write your answer here cm^2



The area of the orange part is:

Write your answer here cm^2

