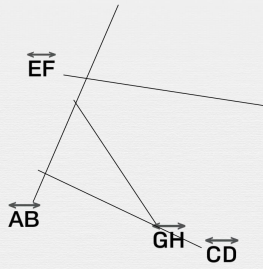




Intersecting lines and points

Observe the lines and write your answer to the question

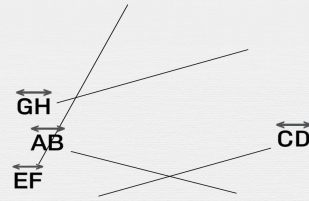
Are \overleftrightarrow{GH} and \overleftrightarrow{EF} intersecting lines?



yes

no

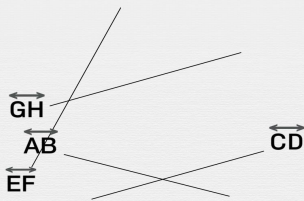
Are \overleftrightarrow{CD} and \overleftrightarrow{GH} intersecting lines?



yes

no

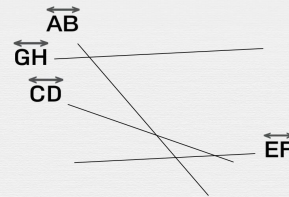
Are \overleftrightarrow{CD} and \overleftrightarrow{GH} intersecting lines?



yes

no

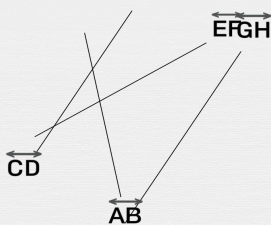
Are \overleftrightarrow{EF} and \overleftrightarrow{GH} intersecting lines?



yes

no

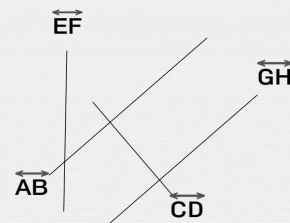
Are \overleftrightarrow{GH} and \overleftrightarrow{CD} intersecting lines?



yes

no

Are \overleftrightarrow{GH} and \overleftrightarrow{AB} intersecting lines?



yes

no