





Calcul d'aires


Calcule l'aire de ces figures.




$A = \frac{\pi \times r^2}{4}$
 $3,14 \times \square^2$
 $A \approx \frac{\quad}{4}$
 $A \approx \frac{\quad}{4}$
 $A \approx \square \text{ cm}^2$




$A = \frac{\pi \times r^2}{4}$
 $3,14 \times \square^2$
 $A \approx \frac{\quad}{4}$
 $A \approx \frac{\quad}{4}$
 $A \approx \square \text{ cm}^2$




$A = \frac{\pi \times r^2}{4}$
 $3,14 \times \square^2$
 $A \approx \frac{\quad}{4}$
 $A \approx \frac{\quad}{4}$
 $A \approx \square \text{ cm}^2$



$A = \frac{\pi \times r^2}{4}$
 $3,14 \times \square^2$
 $A \approx \frac{\quad}{4}$
 $A \approx \frac{\quad}{4}$
 $A \approx \square \text{ cm}^2$



$A = \frac{\pi \times r^2}{4}$
 $3,14 \times \square^2$
 $A \approx \frac{\quad}{4}$
 $A \approx \frac{\quad}{4}$
 $A \approx \square \text{ cm}^2$



$A = \frac{\pi \times r^2}{4}$
 $3,14 \times \square^2$
 $A \approx \frac{\quad}{4}$
 $A \approx \frac{\quad}{4}$
 $A \approx \square \text{ cm}^2$