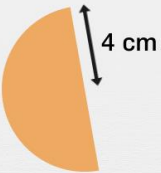


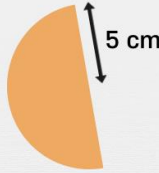


# Calcul d'aires

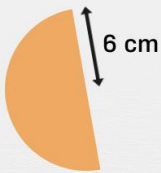
Calcule l'aire de ces figures.



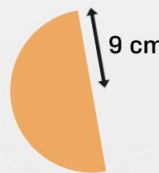
$A = \frac{\pi \times r^2}{2}$   
 $3,14 \times \square^2$   
 $A \approx \frac{\quad}{2}$   
 $A \approx \frac{\quad}{2}$   
 $A \approx \square \text{ cm}^2$



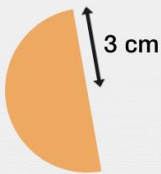
$A = \frac{\pi \times r^2}{2}$   
 $3,14 \times \square^2$   
 $A \approx \frac{\quad}{2}$   
 $A \approx \frac{\quad}{2}$   
 $A \approx \square \text{ cm}^2$



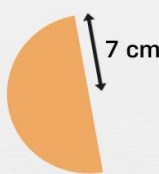
$A = \frac{\pi \times r^2}{2}$   
 $3,14 \times \square^2$   
 $A \approx \frac{\quad}{2}$   
 $A \approx \frac{\quad}{2}$   
 $A \approx \square \text{ cm}^2$



$A = \frac{\pi \times r^2}{2}$   
 $3,14 \times \square^2$   
 $A \approx \frac{\quad}{2}$   
 $A \approx \frac{\quad}{2}$   
 $A \approx \square \text{ cm}^2$



$A = \frac{\pi \times r^2}{2}$   
 $3,14 \times \square^2$   
 $A \approx \frac{\quad}{2}$   
 $A \approx \frac{\quad}{2}$   
 $A \approx \square \text{ cm}^2$



$A = \frac{\pi \times r^2}{2}$   
 $3,14 \times \square^2$   
 $A \approx \frac{\quad}{2}$   
 $A \approx \frac{\quad}{2}$   
 $A \approx \square \text{ cm}^2$