

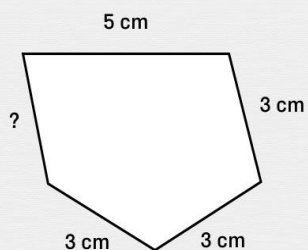


Périmètre des figures

Retrouve la longueur manquante de la figure.

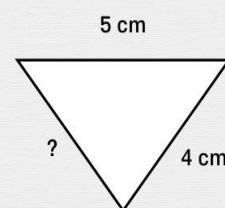
P = 17 cm

? = cm



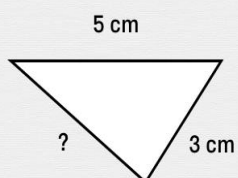
P = 13 cm

? = cm



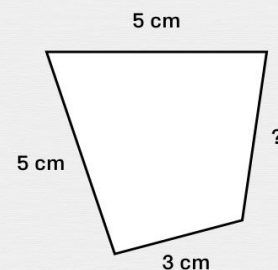
P = 12 cm

? = cm



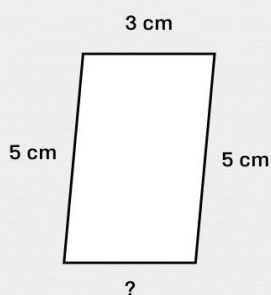
P = 17 cm

? = cm



P = 16 cm

? = cm



P = 10 cm

? = cm

