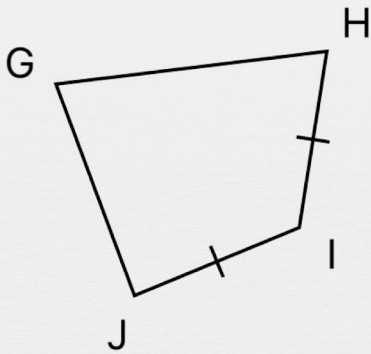




# Geometric Symbols

In each set, circle the sides that have the same length

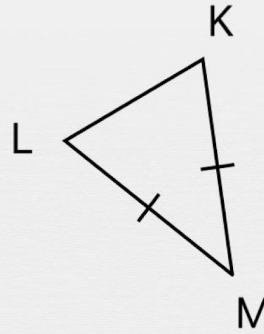


[GH]

[HI]

[IJ]

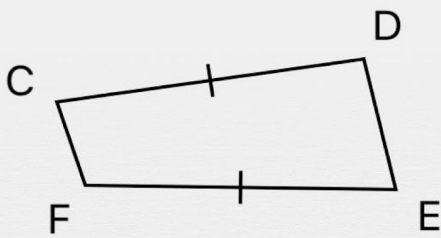
[JG]



[KM]

[LK]

[ML]

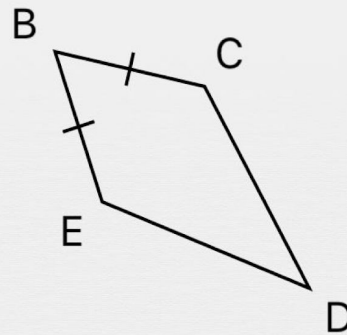


[CD]

[FC]

[EF]

[DE]

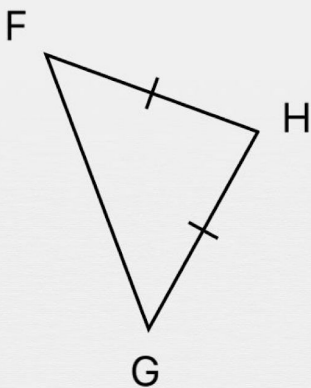


[EB]

[CD]

[BC]

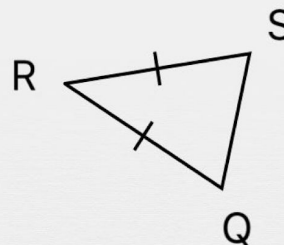
[DE]



[GF]

[HG]

[FH]



[SQ]

[QR]

[RS]