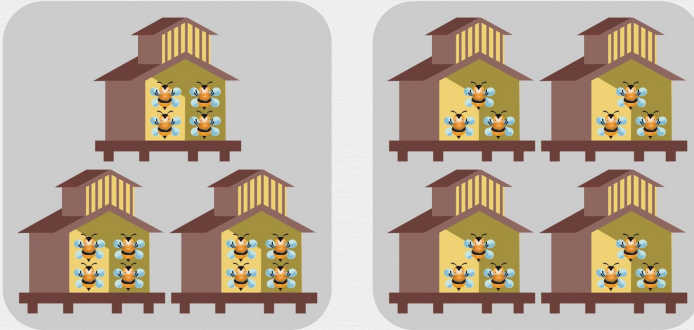




# Understanding multiplication

Circle the images that match the sentences above them.


Benjamin has 4 hives in his garden. Each hive contains 3 bees.



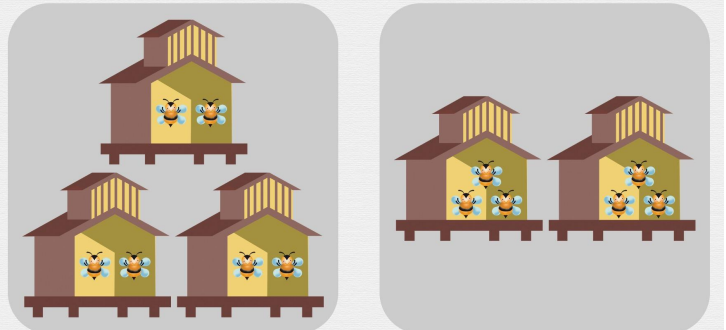
Paul has 4 bags of marbles. Each bag contains 2 marbles.




Julie has 2 bags of marbles. Each bag contains 4 marbles.



Paul has 2 hives in his garden. Each hive contains 3 bees.



Julie has 1 hive in her garden. It contains 4 bees.



Benjamin has 3 bags of marbles. Each bag contains 1 marble.

