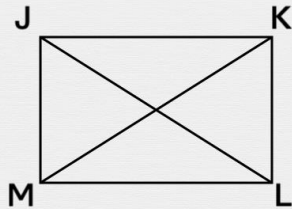




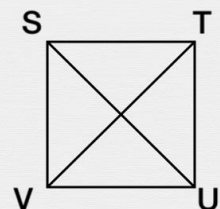
# Quadrilatères : premières propriétés et symboles

Place les bons symboles sur les diagonales de chaque figure.

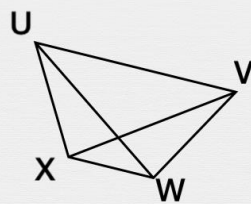
Le rectangle



Le carré



Le trapèze isocèle



Le losange

