




# Multiplying Fractions and Numbers

Circle the correct number of objects.

$$\frac{2}{3} \text{ of } 9$$




$$\frac{1}{2} \text{ of } 10$$




$$\frac{2}{3} \text{ of } 3$$



$$\frac{2}{3} \text{ of } 12$$



$$\frac{1}{2} \text{ of } 6$$



$$\frac{1}{2} \text{ of } 12$$

