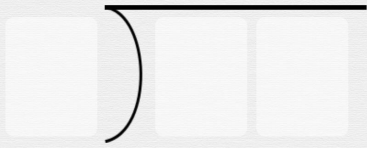





Long division with remainders

Write out these division problems without solving them


$17 \div 5$



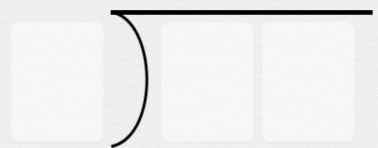
$16 \div 3$




$19 \div 3$



$13 \div 2$



$25 \div 4$



$13 \div 3$

