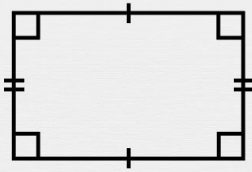




Quadrilatères : premières bases

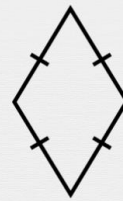
Quel est le nom de ce quadrilatère ?



un carré

un rectangle

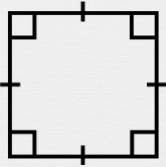
un losange



un carré

un rectangle

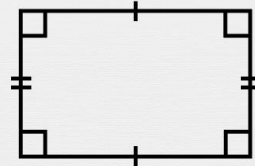
un losange



un carré

un rectangle

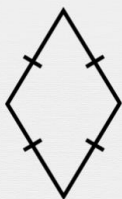
un losange



un carré

un rectangle

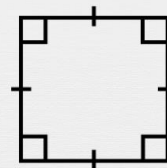
un losange



un carré

un rectangle

un losange



un carré

un rectangle

un losange