




Multiplying Fractions and Numbers

Circle the correct number of objects.


$\frac{1}{3}$ of 3



$\frac{1}{3}$ of 12




$\frac{1}{3}$ of 9



$\frac{1}{3}$ of 6



$\frac{1}{2}$ of 6



$\frac{1}{2}$ of 10

