



The numbers from 20 to 29

How many ladybugs are there? Circle the correct answer




25 26 27 28 29




20 21 22 23 24

How many pencils are there? Circle the correct answer




25 26 27 28 29



25 26 27 28 29

How many apples are there? Circle the correct answer



20 21 22 23 24



25 26 27 28 29