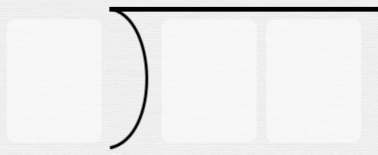




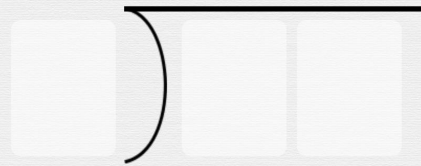
Long division with remainders

Write out these division problems without solving them

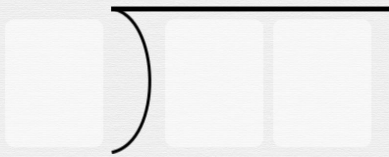
$15 \div 5$



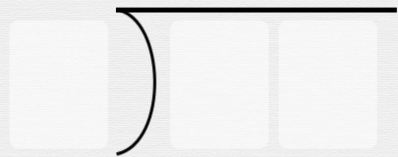
$35 \div 5$




$14 \div 2$



$12 \div 4$



$40 \div 5$



$24 \div 4$

