





## Circumference of circles

Find the diameters of the circles using their circumferences



$$C \approx 9.41 \text{ cm}$$

$$d \approx \quad \text{cm}$$



$$C \approx 7.56 \text{ cm}$$

$$d \approx \quad \text{cm}$$




$$C \approx 9.22 \text{ cm}$$

$$d \approx \quad \text{cm}$$




$$C \approx 3.27 \text{ cm}$$

$$d \approx \quad \text{cm}$$



$$C \approx 6.78 \text{ cm}$$

$$d \approx \quad \text{cm}$$



$$C \approx 9.88 \text{ cm}$$

$$d \approx \quad \text{cm}$$