

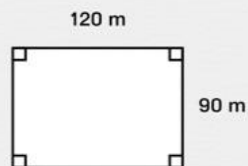


## Find the Area

Solve the word problems. Use scrap paper and a calculator if needed.

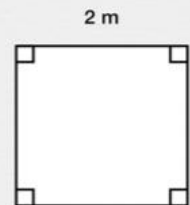
The soccer field is 120 m long and 90 m wide. What is the area of the field?

$m^2$



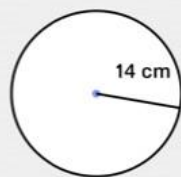
Lily's school desk is square. It is 2 m on each side. What is the area of her desk?

$m^2$



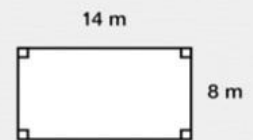
Oliver bought a round ceiling light for his room. It has a 14 cm radius. What is the area of the light?

Write your answer here  $cm^2$



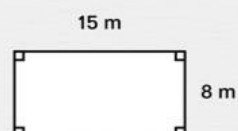
Mrs. Gregory's class is 14 m long and 8 m wide. What is the area of Mrs. Gregory's class?

Write your answer here  $m^2$



Paul mows his rectangular lawn every weekend. The lawn is 15 m long and 8 m wide. What is the area of the lawn?

Write your answer here  $m^2$



A rectangular towel is 85 cm long by 60 cm wide. What is the area of the towel?

Write your answer here  $cm^2$

