




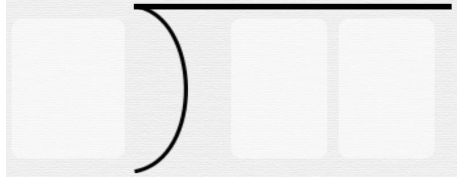
Long division with remainders

Write out these division problems without solving them

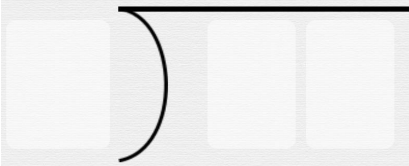
$15 \div 2$




$18 \div 4$




$11 \div 2$



$30 \div 4$



$16 \div 3$



$17 \div 5$

