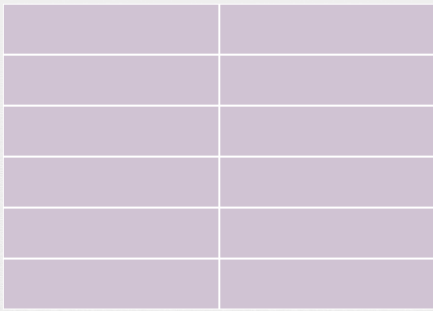





# Understanding Fractions

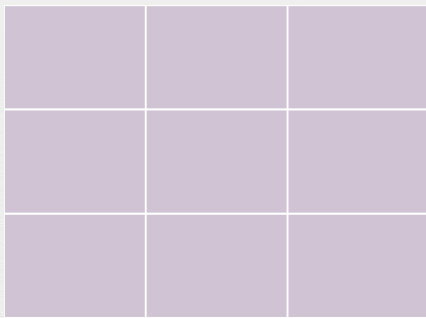
Color the correct number of boxes to match the fraction.



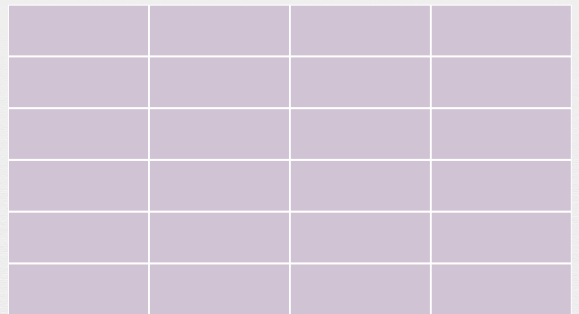
Color  $\frac{1}{3}$  of this figure orange.




Color  $\frac{1}{4}$  of this figure orange.



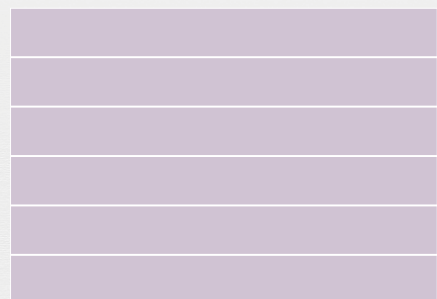
Color  $\frac{1}{3}$  of this figure orange.



Color  $\frac{1}{4}$  of this figure orange.



Color  $\frac{1}{2}$  of this figure orange.



Color  $\frac{1}{3}$  of this figure orange.