





Understanding multiplication


Fill in the blanks



$$3 \times 4 = \square + \square + \square$$




$$2 \times 4 = \square + \square$$



$$2 \times 3 = \square + \square$$



$$4 \times 2 = \square + \square + \square + \square$$



$$3 \times 3 = \square + \square + \square$$



$$2 \times 2 = \square + \square$$