



Intersecting lines and points

Circle the correct answer

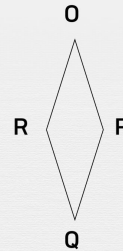
Are \overleftrightarrow{NM} and \overleftrightarrow{ML} intersecting lines?



yes

no

Are \overleftrightarrow{PQ} and \overleftrightarrow{RO} intersecting lines?



yes

no

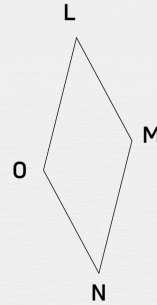
Are \overleftrightarrow{IJ} and \overleftrightarrow{IL} intersecting lines?



yes

no

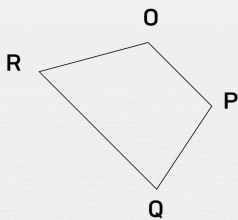
Are \overleftrightarrow{MN} and \overleftrightarrow{NO} intersecting lines?



yes

no

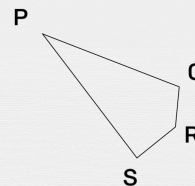
Are \overleftrightarrow{PQ} and \overleftrightarrow{PO} intersecting lines?



yes

no

Are \overleftrightarrow{PS} and \overleftrightarrow{QR} intersecting lines?



yes

no