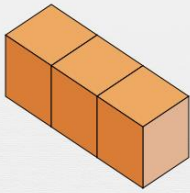


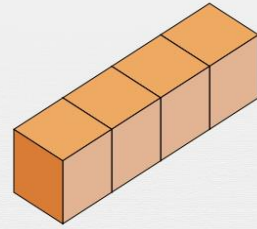


# Comprendre le volume : les unités cubes

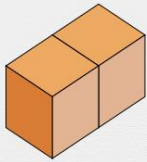
Combien y a-t-il d'unités cubes ?



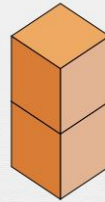
Réponse :



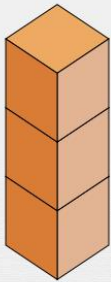
Réponse :



Réponse :



Réponse :



Réponse :



Réponse :