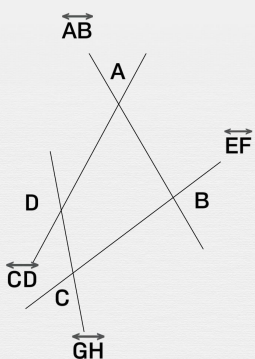




Intersecting lines and points

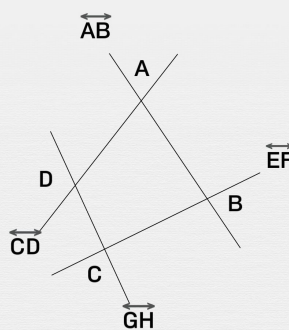
Circle the correct point of intersection

Where is the intersecting point of lines \overleftrightarrow{CD} and \overleftrightarrow{AB} ?



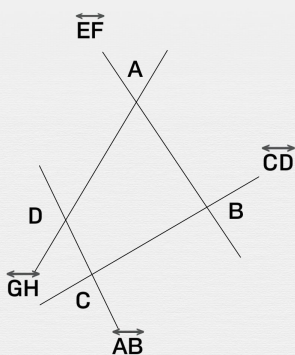
A B C D

Where is the intersecting point of lines \overleftrightarrow{GH} and \overleftrightarrow{CD} ?



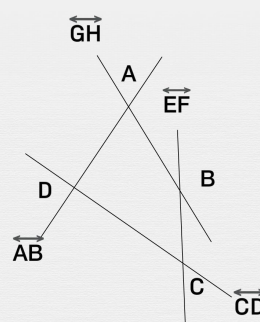
A B C D

Where is the intersecting point of lines \overleftrightarrow{CD} and \overleftrightarrow{AB} ?



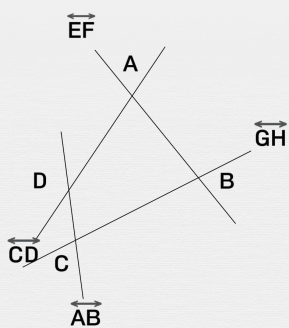
A B C D

Where is the intersecting point of lines \overleftrightarrow{CD} and \overleftrightarrow{AB} ?



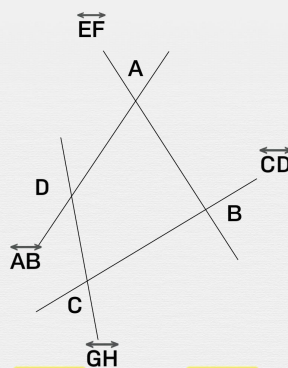
A B C D

Where is the intersecting point of lines \overleftrightarrow{GH} and \overleftrightarrow{AB} ?



A B C D

Where is the intersecting point of lines \overleftrightarrow{AB} and \overleftrightarrow{EF} ?



A B C D