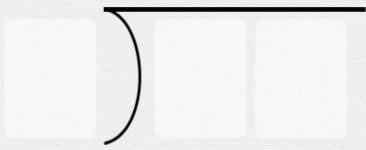




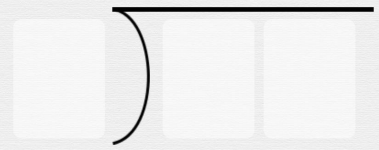
Long division with remainders

Write out these division problems without solving them


$12 \div 2$



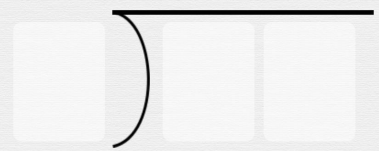
$21 \div 3$




$32 \div 4$



$25 \div 5$



$18 \div 3$



$24 \div 4$

