





# Volumes of Cubes and Boxes

Label each cube with the correct letter (a, b, or c) according to the table




Box	length	width	height
a	3 cm	3 cm	3 cm
b	4 cm	4 cm	6 cm
c	2 cm	2 cm	5 cm






Box	length	width	height
a	3 cm	3 cm	5 cm
b	5 cm	4 cm	3 cm
c	2 cm	2 cm	2 cm



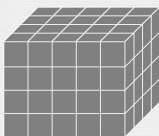

Box	length	width	height
a	6 cm	3 cm	3 cm
b	4 cm	4 cm	4 cm
c	5 cm	2 cm	5 cm



Box	length	width	height
a	6 cm	3 cm	6 cm
b	4 cm	4 cm	3 cm
c	5 cm	2 cm	5 cm



Box	length	width	height
a	6 cm	3 cm	6 cm
b	5 cm	4 cm	4 cm
c	2 cm	2 cm	2 cm



Box	length	width	height
a	6 cm	3 cm	3 cm
b	4 cm	4 cm	4 cm
c	2 cm	2 cm	6 cm

