


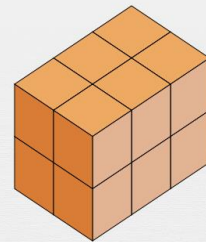


Comprendre le volume : les unités cubes


Quel est le volume de chaque figure en unités cubes ?




Réponse :



Réponse :



Réponse :



Réponse :